



Student Name _____

Date _____

Centre _____

NID (PG) DAT 2016 (NEW): Test 2

Part A - Questions :- 70 (70 marks)

Time: - 2 hrs.

1. The temple situated near Pushkar Lake in Rajasthan is related to –

A) Lord Ganesh	B) Lord Vishnu	C) Lord Maheshwar	D) Lord Brahma
----------------	----------------	-------------------	----------------

2. Which of the following festival associated with full-moon day?

A) Eid-ul-Fitr	B) Easter	C) Holi	D) Diwali
----------------	-----------	---------	-----------

3. Who is the present RBI Governor? _____

4. Solid carbon dioxide is known as _____?

5. VAT was first introduced in which country? _____

6. What is the full form of https? _____

7. How many bones are there in human skull? _____

8. The first English Newspaper in India was started by

A) Dadabhai Noroji	B) JA Hickey	C) Lord William Bentinck	D) Rabindranath Tagore
--------------------	--------------	--------------------------	------------------------

9. Who was the largest serving Chief Minister in India?

A) Bhajan Lal	B) Chimanbhai Patel	C) Jyoti Basu	D) Hiteshwar Saikia
---------------	---------------------	---------------	---------------------

10. Which of the following books has been written by Vikram Seth?

A) My God Died Young	B) Islamic Bomb	C) Look Back in Anger	D) A Suitable Boy
----------------------	-----------------	-----------------------	-------------------

11. What is the term to ask the computer to put information in order numerically or alphabetically?

A) Crop	B) Report	C) Record	D) Sort
---------	-----------	-----------	---------

12. What was the active medium used in the first working laser ever constructed?

A) A diamond block	B) Helium-neon gas	C) A ruby rod	D) Carbon dioxide gas
--------------------	--------------------	---------------	-----------------------

13. What does EPROM stand for?

A) Electric Programmable Read Only Memory	B) Erasable Programmable Read Only Memory
C) Evaluable Philotic Random Optic Memory	D) Every Person Requires One Mind

14. Who is Tania Sachdev?

A) Chess player	B) Cricketer	C) Actress	D) Dancer
-----------------	--------------	------------	-----------

15. Limba Ram is associated in which fields?

A) Sports	B) Politics	C) Social Service	D) Motion Picture
-----------	-------------	-------------------	-------------------


16. Who is the creator of the Rock Garden in Chandigarh?

A) Pupal Jayakar	B) Le Corbousier	C) Glen	D) Nek Chand
------------------	------------------	---------	--------------

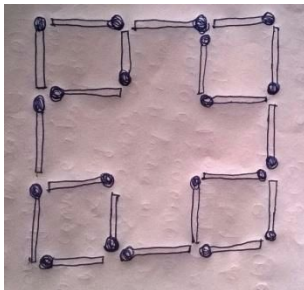
17. Hitendra Desai was famous in which field?

A) Social Service	B) Journalism	C) Politics	D) Literature
-------------------	---------------	-------------	---------------

18. How many vanishing points can be expected for the below sketch?



19. Below picture shows 20 match sticks being arranged with some alignment. How many squares are there totally?



20. The appropriate human hand-to-leg ratio in standard drawings is

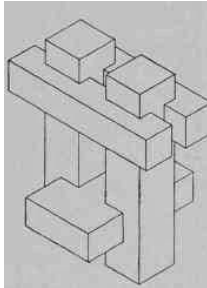
21. In a classroom of 100 students, 40 students feel alert, while 60 students feel bored, if 50% of the alert students turn bored. After that, 50% of the bored students turn alert, what is the final number of students who feel alert and bored?

22. A man has Rs. 480 in the denominations of one-rupee notes, five-rupee notes and ten-rupee notes. The number of notes of each denomination is equal. What is the total number of notes that he has?

A) 45	B) 60	C) 75	D) 90
-------	-------	-------	-------

23. Look at the series: 26, 24, 20, 18, 14, what number should come next ?

24. Count the number of faces in the below picture



25. There are 6 people in a room. They shake each other's hands once and only once. How many handshakes are there altogether?

26. Suppose 6 monkeys take 6 minutes to eat 6 bananas, how many minutes would it take

- 3 monkeys to eat 3 bananas
- 24 monkeys to eat 24 bananas

27. What is the probability of getting a sum 9 from two throws of a dice?

28. The below picture of 'street art' best describes which of the following ?



A) . Grafitti
B) .Wall Painting
C) .Stencil art
D) .Spray Painting

29. What is the standard (ISO) paper size format of A1 ?

A) 841 X 1189	B) 420 X 594	C) 297 X 420	D) 594 X 841
---------------	--------------	--------------	--------------

30. Which of the following is a technique that is NOT related to Animation ?

A) Puppetry	B) Stop motion	C) Motion capture	D) Rotoscoping
-------------	----------------	-------------------	----------------


31. William Addison Dwiggins' coined which design term ?

A) Product Design	B) Graphic Design	C) User Interface Design	D) Engineering Design
-------------------	-------------------	--------------------------	-----------------------

32. Which of the below shown cars looks more sportive?



33. To which state the following shrine belongs to?



- A) Uttar Pradesh
- B) Madhya Pradesh
- C) Andhra Pradesh
- D) Oddisha

34. Who made the famous painting shown below.



- a. Raja Ravi Verma
- b. MF Hussain
- c. Jamini Roy
- d. Tyeb Mehta

35. Which of the following is used in pencils?

A) Graphite	B) Silicon	C) Charcoal	D) Phosphorous
-------------	------------	-------------	----------------

36. Who wrote the line: 'A thing of beauty is a joy forever'?

A) John Keats	B) Robert Browning	C) P.B.Shelley	D) William Wordsworth
---------------	--------------------	----------------	-----------------------

37. The centenary of Mahatma Gandhi's arrival in South Africa was celebrated in

A) May 1993	B) August 1993	C) July 1993	D) September 1993
-------------	----------------	--------------	-------------------

38. IBM is related to...?

A) .It company	B) .Product and services	C) .Client Consultant	D) .Property
----------------	--------------------------	-----------------------	--------------

39. Godrej company deals in...?

A) .Electronics	B) .Eatables	C) .Furniture	D) .Furnishings
-----------------	--------------	---------------	-----------------

40. .MOV' extension refers usually to what kind of file?

A) Image file	B) Animation/movie file	C) Audio file	D) MS Office document
---------------	-------------------------	---------------	-----------------------

41. Name 3 movements Narendra Modi started?

--	--	--

42. Ms. Meera Sahib Fathima Beevi is distinguished as the first lady

A) Prime minister of Bangladesh	B) Judge of Supreme Court	C) Judge of the High court	D) Governor of a state
---------------------------------	---------------------------	----------------------------	------------------------

43. Who did The Rock wrestle in the main event at the 1999 edition of "Wrestlemania"?

A) Stone Cold Steve Austin	B) Triple H	C) Mankind	D) Undertaker
----------------------------	-------------	------------	---------------

44. The highest mountain peak of Oceania is

A) Mt. Victoria, Papua New Guinea	B) Mt. Kosciusko, Australia	C) Mt. Cook, South Island (New Zealand)	D) Puncak Jaya, Indonesia.
-----------------------------------	-----------------------------	---	----------------------------

45. Who has been awarded the first lifetime Achievement Award for his/her contribution in the field of Cinema?

A) Ashok Kumar	B) Hou Hsio-hsein	C) Akira Kurosawa	D) Bernardo Bertolucci
----------------	-------------------	-------------------	------------------------

46. Which of the following is NOT written by Munshi Premchand Guide?

A) Gaban	B) Godan	C)	D) Manasorovar
----------	----------	----	----------------

47. Manav Seva Award has been instituted in the memory of

A) Rajiv Gandhi	B) Dr. Rajendra Prasad	C) Indira Gandhi	D) Acharya
-----------------	------------------------	------------------	------------

48. Which of the following places is famous for Chikankari work, which is a traditional art of embroidery?

A) Lucknow	B) Hyderabad	C) Jaipur	D) Mysore
------------	--------------	-----------	-----------

49. Kalchakra ceremony is associated with which of the following ceremonies?

A) Hinduism	B) Buddhism	C) Jainism	D) Islam
-------------	-------------	------------	----------

50. In which of the following festivals are boat races a special feature?

A) Onam	B) Rongali Bihu	C) Navratri	D) Pongal
---------	-----------------	-------------	-----------

51. A number of friends decided to go on a picnic and planned to spend Rs. 96 on eatables. Four of them, however, did not turn up. As a consequence, the remaining ones had to contribute Rs. 4 each extra. The number of those who attended the picnic was?
52. Count the number of Presidents till now India had after Independence?
53. After how many years does the election committee again poll for votes?
54. How many major rivers of Indian Sub continent /Republic India?
55. How many types of Indian Classical dances are there?
56. The Chemical Name For 'Common Salt' Is...

A) Calcium Carbonate	B) Copper Sulfate	C) Potassium Nitrate	D) Sodium Chloride
----------------------	-------------------	----------------------	--------------------

57. A Mixture Of Different Coloured Inks Can Be Separated Using...

A) Chromatography	B) Distillation	C) Evaporation	D) Adsorption
-------------------	-----------------	----------------	---------------

58. Tagline for quikr...

A) Bech de	B) life me laga dala, toh zinga lala	C) Aasan hai badlna	D) Badlega India
------------	--------------------------------------	---------------------	------------------

59. Identify the artist...



A) Claude	B) Velasquez
C) Claude monet	D) Oscar Claude Monet

60. The Potato Eaters was painted by.....
61. Who is Michael Folly?
62. Epoxy resins are used as-----
63. Detergents used for cleaning clothes and utensils contain?
64. Bell metal is an alloy of-----
65. Identify the object?




66. What is the height of a normal chair?
67. Name 5 SUV cars in India?
68. The number of principal organs of UNO is-----
69. The member countries of NAFTA are-----
70. SAARC was founded in-----

Part B - Questions :- 3 (30 marks)


Time: - 1 hrs.

1. Imagine that you have found a bottle on a beach and figured out that there is a small genie inside who grants any wishes you make. What are the 4 wishes you will ask the genie and why? Explain through sketches and explanation.

2. Imagine that the world has no vehicles / aircraft's etc to travel. What are the 5 new ways for you to travel long distance? Explain through sketches and texts. Creative ideas are appreciated.



3. Depict any one of the following words in 5 different ways:
a) Tension
b) Balance
Show through sketches only. You can color your depiction if required.





**Check out SILICA's NID Study Material Kit and
Test Series at www.silica.co.in**